

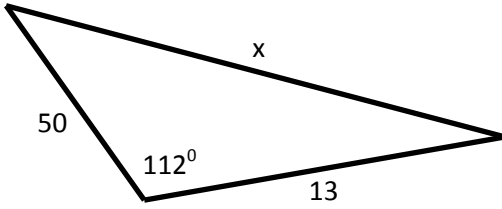
**Law of Cosines**

© MATHguide.com

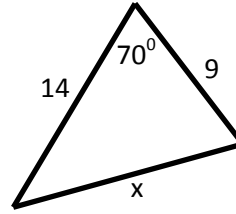
Name: \_\_\_\_\_

Solve for the indicated side or angle.

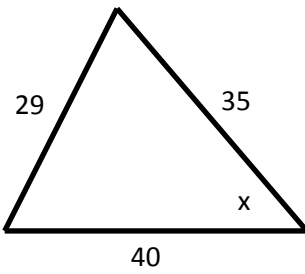
1)



2)



3)



4)

